

Nome: _____

N.º ____ Turma ____

Data: 20/ 04/ 2018

1. Escreve os números ímpares até 99.

1 - 3 - 5 _____

2. Escreve os números por extenso (em palavras).

99 _____




85 _____

72 _____


100 _____

63 _____

3. Que horas marcam os relógios.




4. Desenha os ponteiros dos relógios.




8 horas



6 horas



1 horas



10 horas

5. Escreve os meses do ano.

Janeiro, _____, _____, _____,
_____, _____, _____, _____,
_____, _____, Novembro, _____.

6. Calcula as operações.

$$\begin{array}{r} 36 \\ + 23 \\ \hline \end{array}$$

$$\begin{array}{r} 45 \\ + 52 \\ \hline \end{array}$$

$$\begin{array}{r} 53 \\ + 26 \\ \hline \end{array}$$

$$\begin{array}{r} 28 \\ + 71 \\ \hline \end{array}$$

$$\begin{array}{r} 97 \\ - 54 \\ \hline \end{array}$$

$$\begin{array}{r} 86 \\ - 45 \\ \hline \end{array}$$

$$\begin{array}{r} 76 \\ - 32 \\ \hline \end{array}$$

$$\begin{array}{r} 48 \\ - 26 \\ \hline \end{array}$$

Bom trabalho!