

Nome: _____

N.º ____ Turma ____

Data: 21/09/ 2018

1. Calcula o valor das expressões numéricas.

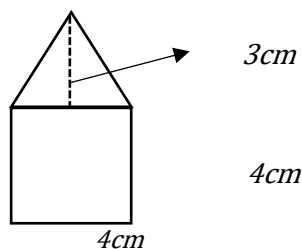
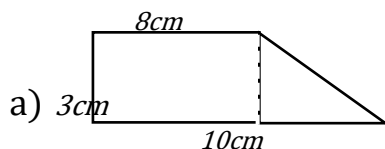
a) $8^2 : 4 \times 3 + 6 - 7$

b) $5^3 - 25 \times (3^3 : 3 + 2)$

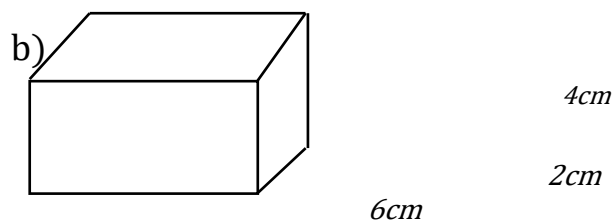
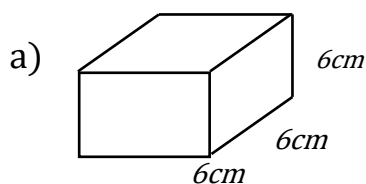
c) $\frac{3}{9} + \frac{4}{9} - \frac{5}{9}$

d) $\frac{15}{12} - \left(\frac{9}{12} + \frac{3}{12} \right)$

2. Determina a área das figuras.



3. Calcula o volume dos sólidos, nas figuras abaixo.



4. Calcula, usa o procedimiento escrito.

$$\begin{array}{r} \text{a) } 20415 \\ \times \quad 7245 \\ \hline \end{array}$$

$$\begin{array}{r} \text{b) } 54361 \\ \times \quad 3041 \\ \hline \end{array}$$

$$\begin{array}{r|l} \text{c) } 68573 & 24 \\ \hline & \end{array}$$

$$\begin{array}{r|l} \text{d) } 8479 & 12 \\ \hline & \end{array}$$

Boa exercitação!