

Nome: _____

N.º _____ Turma _____

Data: 03/ 10/ 2019

DESDE 1992

1. Conta os números de 10 em 10.

a) 830, 840, _____, _____, _____, _____, _____.

b) 300, 290, _____, _____, _____, _____, _____.

2. Completa a tabela como mostra o exemplo.

Número	Decomposição	Leitura
326	$300 + 20 + 6$	Trezentos e vinte e seis
534		
129		
745		
1015		

3. Preenche os resultados:

$30 : 6 = 5$ porque $5 \times 6 = 30$

$45 : 9 =$ _____ porque $9 \times$ _____ = _____

$24 :$ _____ = 3 porque _____ \times _____ = _____

_____ : 7 = 2 porque _____ \times _____ = _____

$56 : 8 =$ _____ porque $8 \times$ _____ = _____

4. Resolve. Usa a forma vertical.




$$\begin{array}{r} 23 \\ \times 13 \\ \hline \end{array}$$

$$\begin{array}{r} 33 \\ \times 12 \\ \hline \end{array}$$

$$\begin{array}{r} 31 \\ \times 15 \\ \hline \end{array}$$

$$\begin{array}{r} 23 \\ \times 23 \\ \hline \end{array}$$

5. Marca as horas indicadas nos relógios.



6. Calcula as operações:

$$\begin{array}{r} 654 \\ + 243 \\ \hline \end{array}$$

$$\begin{array}{r} 746 \\ - 328 \\ \hline \end{array}$$

$$\begin{array}{r} 95 \\ \times 32 \\ \hline \end{array}$$

$$\begin{array}{r} 86 \overline{) 2} \\ \hline \end{array}$$